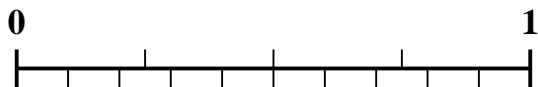




Use the number line to solve each problem.

Answers

- 1) Which amount is larger,
- $\frac{1}{4}$
- or .13 ?



- 2) Which amount is larger,
- $\frac{4}{9}$
- or .24 ?



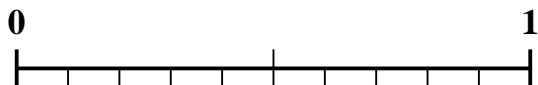
- 3) Which amount is larger,
- $\frac{3}{8}$
- or .22 ?




- 4) Which amount is larger,
- $\frac{3}{4}$
- or .61 ?



- 5) Which amount is larger,
- $\frac{1}{2}$
- or .69 ?



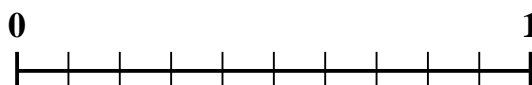
- 6) Which amount is larger,
- $\frac{2}{3}$
- or .83 ?



- 7) Which amount is larger,
- $\frac{5}{6}$
- or .64 ?



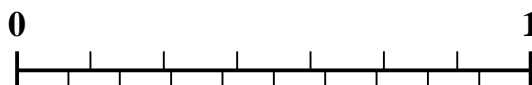
- 8) Which amount is larger,
- $\frac{7}{10}$
- or .82 ?



- 9) Which amount is larger,
- $\frac{1}{3}$
- or .47 ?



- 10) Which amount is larger,
- $\frac{5}{7}$
- or .90 ?



1. _____
2. _____
3. _____
4. _____
5. _____
6. _____
7. _____
8. _____
9. _____
10. _____

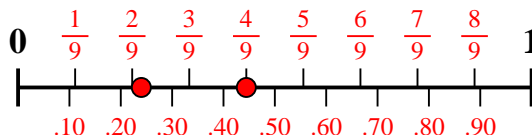


Use the number line to solve each problem.

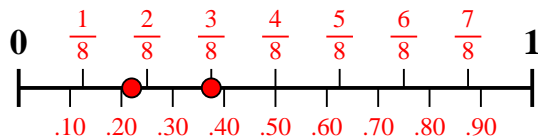
- 1) Which amount is larger,
- $\frac{1}{4}$
- or .13 ?



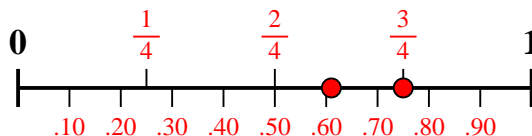
- 2) Which amount is larger,
- $\frac{4}{9}$
- or .24 ?



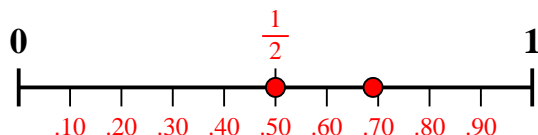
- 3) Which amount is larger,
- $\frac{3}{8}$
- or .22 ?



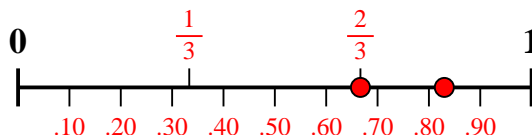
- 4) Which amount is larger,
- $\frac{3}{4}$
- or .61 ?



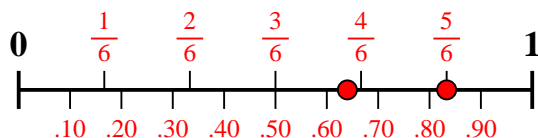
- 5) Which amount is larger,
- $\frac{1}{2}$
- or .69 ?



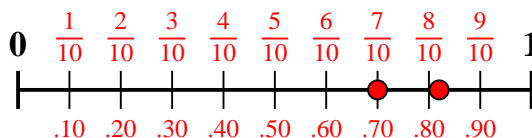
- 6) Which amount is larger,
- $\frac{2}{3}$
- or .83 ?



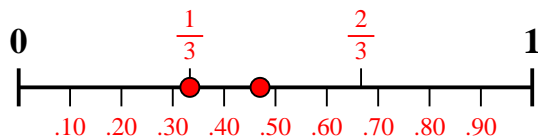
- 7) Which amount is larger,
- $\frac{5}{6}$
- or .64 ?



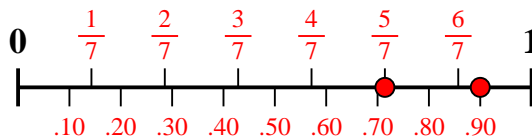
- 8) Which amount is larger,
- $\frac{7}{10}$
- or .82 ?



- 9) Which amount is larger,
- $\frac{1}{3}$
- or .47 ?



- 10) Which amount is larger,
- $\frac{5}{7}$
- or .90 ?

**Answers**

1. $\frac{1}{4}$
2. $\frac{4}{9}$
3. $\frac{3}{8}$
4. $\frac{3}{4}$
5. **.69**
6. **.83**
7. $\frac{5}{6}$
8. **.82**
9. **.47**
10. **.90**